


NAME: _____

6S



SCORE

BASELINE

CHECK 1

CHECK 2



BASELINE



Name: _____

Date: _____

- | | | | | | |
|-----|-----------------------|-----|-----------------------|-----|---------------------|
| 1. | $5 \times 6 =$ _____ | 21. | $8 \times 6 =$ _____ | 41. | $60 \div 6 =$ _____ |
| 2. | $7 \times 6 =$ _____ | 22. | $5 \times 6 =$ _____ | 42. | $66 \div 6 =$ _____ |
| 3. | $8 \times 6 =$ _____ | 23. | $3 \times 6 =$ _____ | 43. | $48 \div 6 =$ _____ |
| 4. | $4 \times 6 =$ _____ | 24. | $4 \times 6 =$ _____ | 44. | $30 \div 6 =$ _____ |
| 5. | $3 \times 6 =$ _____ | 25. | $6 \times 6 =$ _____ | 45. | $42 \div 6 =$ _____ |
| 6. | $9 \times 6 =$ _____ | 26. | $9 \times 6 =$ _____ | 46. | $36 \div 6 =$ _____ |
| 7. | $11 \times 6 =$ _____ | 27. | $10 \times 6 =$ _____ | 47. | $12 \div 6 =$ _____ |
| 8. | $12 \times 6 =$ _____ | 28. | $7 \times 6 =$ _____ | 48. | $6 \div 6 =$ _____ |
| 9. | $3 \times 6 =$ _____ | 29. | $2 \times 6 =$ _____ | 49. | $54 \div 6 =$ _____ |
| 10. | $1 \times 6 =$ _____ | 30. | $1 \times 6 =$ _____ | 50. | $66 \div 6 =$ _____ |
| 11. | $8 \times 6 =$ _____ | 31. | $12 \div 6 =$ _____ | 51. | $42 \div 6 =$ _____ |
| 12. | $6 \times 6 =$ _____ | 32. | $24 \div 6 =$ _____ | 52. | $24 \div 6 =$ _____ |
| 13. | $7 \times 6 =$ _____ | 33. | $30 \div 6 =$ _____ | 53. | $18 \div 6 =$ _____ |
| 14. | $9 \times 6 =$ _____ | 34. | $54 \div 6 =$ _____ | 54. | $48 \div 6 =$ _____ |
| 15. | $12 \times 6 =$ _____ | 35. | $60 \div 6 =$ _____ | 55. | $30 \div 6 =$ _____ |
| 16. | $11 \times 6 =$ _____ | 36. | $72 \div 6 =$ _____ | 56. | $72 \div 6 =$ _____ |
| 17. | $2 \times 6 =$ _____ | 37. | $42 \div 6 =$ _____ | 57. | $60 \div 6 =$ _____ |
| 18. | $1 \times 6 =$ _____ | 38. | $36 \div 6 =$ _____ | 58. | $36 \div 6 =$ _____ |
| 19. | $10 \times 6 =$ _____ | 39. | $18 \div 6 =$ _____ | 59. | $6 \div 6 =$ _____ |
| 20. | $9 \times 6 =$ _____ | 40. | $6 \div 6 =$ _____ | 60. | $12 \div 6 =$ _____ |

SCORE:
(5 minute limit)

/60

TIME TAKEN (optional)

<input type="text"/>	<input type="text"/>
MINUTES	SECONDS



Name: _____

Date: _____

MULTIPLICATION 1

Practise 6s

Complete first and then use it to help you if you get stuck.

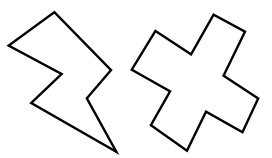
ROCK BOX

1.	$1 \times 6 =$	_____
2.	$2 \times 6 =$	_____
3.	$3 \times 6 =$	_____
4.	$4 \times 6 =$	_____
5.	$5 \times 6 =$	_____
6.	$6 \times 6 =$	_____
7.	$7 \times 6 =$	_____
8.	$8 \times 6 =$	_____
9.	$9 \times 6 =$	_____
10.	$10 \times 6 =$	_____
11.	$11 \times 6 =$	_____
12.	$12 \times 6 =$	_____

- | | | | | | |
|-----|-----------------|-------|-----|-----------------|-------|
| 21. | $11 \times 6 =$ | _____ | 41. | $9 \times 6 =$ | _____ |
| 22. | $4 \times 6 =$ | _____ | 42. | $5 \times 6 =$ | _____ |
| 23. | $10 \times 6 =$ | _____ | 43. | $3 \times 6 =$ | _____ |
| 24. | $8 \times 6 =$ | _____ | 44. | $2 \times 6 =$ | _____ |
| 25. | $9 \times 6 =$ | _____ | 45. | $12 \times 6 =$ | _____ |
| 26. | $1 \times 6 =$ | _____ | 46. | $10 \times 6 =$ | _____ |
| 27. | $3 \times 6 =$ | _____ | 47. | $11 \times 6 =$ | _____ |
| 28. | $12 \times 6 =$ | _____ | 48. | $1 \times 6 =$ | _____ |
| 29. | $4 \times 6 =$ | _____ | 49. | $5 \times 6 =$ | _____ |
| 30. | $9 \times 6 =$ | _____ | 50. | $7 \times 6 =$ | _____ |
| 31. | $8 \times 6 =$ | _____ | 51. | $8 \times 6 =$ | _____ |
| 32. | $7 \times 6 =$ | _____ | 52. | $11 \times 6 =$ | _____ |
| 33. | $11 \times 6 =$ | _____ | 53. | $10 \times 6 =$ | _____ |
| 34. | $7 \times 6 =$ | _____ | 54. | $6 \times 6 =$ | _____ |
| 35. | $1 \times 6 =$ | _____ | 55. | $9 \times 6 =$ | _____ |
| 36. | $12 \times 6 =$ | _____ | 56. | $4 \times 6 =$ | _____ |
| 37. | $2 \times 6 =$ | _____ | 57. | $3 \times 6 =$ | _____ |
| 38. | $5 \times 6 =$ | _____ | 58. | $6 \times 6 =$ | _____ |
| 39. | $4 \times 6 =$ | _____ | 59. | $9 \times 6 =$ | _____ |
| 40. | $6 \times 6 =$ | _____ | 60. | $11 \times 6 =$ | _____ |

Continue here...

- | | | |
|-----|-----------------|-------|
| 13. | $7 \times 6 =$ | _____ |
| 14. | $12 \times 6 =$ | _____ |
| 15. | $8 \times 6 =$ | _____ |
| 16. | $12 \times 6 =$ | _____ |
| 17. | $10 \times 6 =$ | _____ |
| 18. | $9 \times 6 =$ | _____ |
| 19. | $11 \times 6 =$ | _____ |
| 20. | $3 \times 6 =$ | _____ |



SCORE:

Grown-ups:
Can learners spot links between neighbouring questions?



Name: _____

Date: _____

MULTIPLICATION 2

Practise 6s

Complete first and then use it to help you if you get stuck.

ROCK BOX

1. $1 \times 6 =$ _____

2. $2 \times 6 =$ _____

3. $3 \times 6 =$ _____

4. $4 \times 6 =$ _____

5. $5 \times 6 =$ _____

6. $6 \times 6 =$ _____

7. $7 \times 6 =$ _____

8. $8 \times 6 =$ _____

9. $9 \times 6 =$ _____

10. $10 \times 6 =$ _____

11. $11 \times 6 =$ _____

12. $12 \times 6 =$ _____

13. $6 \times 1 =$ _____

14. $6 \times 2 =$ _____

15. $6 \times 3 =$ _____

16. $6 \times 4 =$ _____

17. $6 \times 5 =$ _____

18. $6 \times 6 =$ _____

19. $6 \times 7 =$ _____

20. $6 \times 8 =$ _____

21. $6 \times 9 =$ _____

22. $6 \times 10 =$ _____

23. $6 \times 11 =$ _____

24. $6 \times 12 =$ _____

41. $6 \times 3 =$ _____

42. $5 \times 6 =$ _____

43. $6 \times 8 =$ _____

44. $7 \times 6 =$ _____

45. $8 \times 6 =$ _____

46. $6 \times 12 =$ _____

47. $4 \times 6 =$ _____

48. $6 \times 2 =$ _____

49. $1 \times 6 =$ _____

50. $6 \times 5 =$ _____

51. $6 \times 11 =$ _____

52. $6 \times 1 =$ _____

53. $6 \times 12 =$ _____

54. $6 \times 7 =$ _____

55. $6 \times 9 =$ _____

56. $6 \times 6 =$ _____

57. $6 \times 5 =$ _____

58. $6 \times 9 =$ _____

59. $6 \times 3 =$ _____

60. $3 \times 6 =$ _____

Continue here...

25. $6 \times 4 =$ _____

26. $1 \times 6 =$ _____

27. $6 \times 5 =$ _____

28. $6 \times 6 =$ _____

29. $7 \times 6 =$ _____

30. $5 \times 6 =$ _____

31. $6 \times 2 =$ _____

32. $4 \times 6 =$ _____

33. $6 \times 7 =$ _____

34. $6 \times 8 =$ _____

35. $9 \times 6 =$ _____

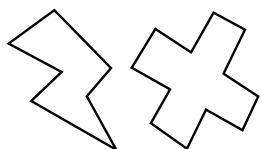
36. $6 \times 11 =$ _____

37. $12 \times 6 =$ _____

38. $11 \times 6 =$ _____

39. $7 \times 6 =$ _____

40. $6 \times 1 =$ _____



SCORE:

Grown-ups:
Can learners spot links between neighbouring questions?



Name: _____

Date: _____

MISSING NUMBER 1

Practise 6s

Complete first and then use it to help you if you get stuck.

ROCK BOX

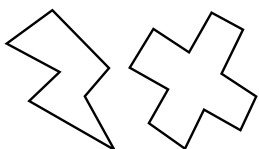
1.	_____	× 6 = 6
2.	_____	× 6 = 12
3.	_____	× 6 = 18
4.	_____	× 6 = 24
5.	_____	× 6 = 30
6.	_____	× 6 = 36
7.	_____	× 6 = 42
8.	_____	× 6 = 48
9.	_____	× 6 = 54
10.	_____	× 6 = 60
11.	_____	× 6 = 66
12.	_____	× 6 = 72

- 21. _____ × 6 = 30
- 22. _____ × 6 = 12
- 23. _____ × 6 = 36
- 24. _____ × 6 = 72
- 25. _____ × 6 = 60
- 26. _____ × 6 = 54
- 27. _____ × 6 = 66
- 28. _____ × 6 = 42
- 29. _____ × 6 = 24
- 30. _____ × 6 = 18
- 31. _____ × 6 = 6
- 32. _____ × 6 = 66
- 33. _____ × 6 = 48
- 34. _____ × 6 = 30
- 35. _____ × 6 = 6
- 36. _____ × 6 = 24
- 37. _____ × 6 = 36
- 38. _____ × 6 = 42
- 39. _____ × 6 = 54
- 40. _____ × 6 = 72

- 41. _____ × 6 = 12
- 42. _____ × 6 = 18
- 42. _____ × 6 = 6
- 44. _____ × 6 = 30
- 45. _____ × 6 = 42
- 46. _____ × 6 = 24
- 47. _____ × 6 = 48
- 48. _____ × 6 = 72
- 49. _____ × 6 = 60
- 50. _____ × 6 = 54
- 51. _____ × 6 = 36
- 52. _____ × 6 = 18
- 53. _____ × 6 = 66
- 54. _____ × 6 = 6
- 55. _____ × 6 = 12
- 56. _____ × 6 = 42
- 57. _____ × 6 = 30
- 58. _____ × 6 = 48
- 59. _____ × 6 = 54
- 60. _____ × 6 = 60

Continue here...

- 13. _____ × 6 = 24
- 14. _____ × 6 = 6
- 15. _____ × 6 = 60
- 16. _____ × 6 = 54
- 17. _____ × 6 = 72
- 18. _____ × 6 = 66
- 19. _____ × 6 = 48
- 20. _____ × 6 = 42



SCORE:

Grown-ups:
Can learners spot links between neighbouring questions?



Name: _____

Date: _____

MISSING NUMBER 2

Practise 6s

Complete first and then use it to help you if you get stuck.

ROCK BOX			
1.	$\times 6 = 6$	2.	$\times 1 = 6$
3.	$\times 6 = 12$	4.	$\times 2 = 12$
5.	$\times 6 = 18$	6.	$\times 3 = 18$
7.	$\times 6 = 24$	8.	$\times 4 = 24$
9.	$\times 6 = 30$	10.	$\times 5 = 30$
11.	$\times 6 = 36$	12.	$\times 6 = 36$
13.	$\times 6 = 42$	14.	$\times 7 = 42$
15.	$\times 6 = 48$	16.	$\times 8 = 48$
17.	$\times 6 = 54$	18.	$\times 9 = 54$
19.	$\times 6 = 60$	20.	$\times 10 = 60$
21.	$\times 6 = 66$	22.	$\times 11 = 66$
23.	$\times 6 = 72$	24.	$\times 12 = 72$

Continue here...

25. _____ $\times 6 = 54$

33. _____ $\times 1 = 6$

26. _____ $\times 9 = 54$

34. _____ $\times 11 = 66$

27. _____ $\times 6 = 36$

35. _____ $\times 9 = 54$

28. _____ $\times 7 = 42$

36. _____ $\times 6 = 72$

29. _____ $\times 8 = 48$

37. _____ $\times 6 = 42$

30. _____ $\times 6 = 66$

38. _____ $\times 5 = 30$

31. _____ $\times 12 = 72$

39. _____ $\times 6 = 36$

32. _____ $\times 6 = 6$

40. _____ $\times 3 = 18$

41. _____ $\times 4 = 24$

42. _____ $\times 6 = 12$

43. _____ $\times 6 = 48$

44. _____ $\times 12 = 72$

45. _____ $\times 6 = 36$

46. _____ $\times 7 = 42$

47. _____ $\times 6 = 54$

48. _____ $\times 11 = 66$

49. _____ $\times 6 = 60$

50. _____ $\times 6 = 6$

51. _____ $\times 6 = 72$

52. _____ $\times 6 = 18$

53. _____ $\times 6 = 24$

54. _____ $\times 6 = 30$

55. _____ $\times 6 = 60$

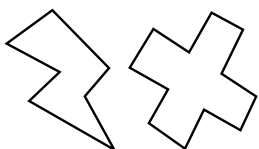
56. _____ $\times 2 = 12$

57. _____ $\times 8 = 48$

58. _____ $\times 1 = 6$

59. _____ $\times 9 = 54$

60. _____ $\times 12 = 72$



SCORE:

Grown-ups:
Can learners spot links between neighbouring questions?



Name: _____

Date: _____

DIVISION 1

Practise 6s

Complete first and then use it to help you if you get stuck.

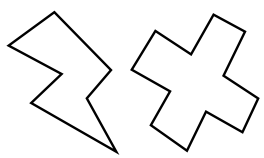
ROCK BOX

1.	$6 \div 6 =$	_____
2.	$12 \div 6 =$	_____
3.	$18 \div 6 =$	_____
4.	$24 \div 6 =$	_____
5.	$30 \div 6 =$	_____
6.	$36 \div 6 =$	_____
7.	$42 \div 6 =$	_____
8.	$48 \div 6 =$	_____
9.	$54 \div 6 =$	_____
10.	$60 \div 6 =$	_____
11.	$66 \div 6 =$	_____
12.	$72 \div 6 =$	_____

- | | | | | | |
|-----|---------------|-------|-----|---------------|-------|
| 21. | $66 \div 6 =$ | _____ | 41. | $54 \div 6 =$ | _____ |
| 22. | $54 \div 6 =$ | _____ | 42. | $48 \div 6 =$ | _____ |
| 23. | $30 \div 6 =$ | _____ | 43. | $12 \div 6 =$ | _____ |
| 24. | $24 \div 6 =$ | _____ | 44. | $36 \div 6 =$ | _____ |
| 25. | $18 \div 6 =$ | _____ | 45. | $42 \div 6 =$ | _____ |
| 26. | $36 \div 6 =$ | _____ | 46. | $36 \div 6 =$ | _____ |
| 27. | $72 \div 6 =$ | _____ | 47. | $30 \div 6 =$ | _____ |
| 28. | $48 \div 6 =$ | _____ | 48. | $48 \div 6 =$ | _____ |
| 29. | $24 \div 6 =$ | _____ | 49. | $12 \div 6 =$ | _____ |
| 30. | $60 \div 6 =$ | _____ | 50. | $6 \div 6 =$ | _____ |
| 31. | $66 \div 6 =$ | _____ | 51. | $24 \div 6 =$ | _____ |
| 32. | $54 \div 6 =$ | _____ | 52. | $54 \div 6 =$ | _____ |
| 33. | $42 \div 6 =$ | _____ | 53. | $18 \div 6 =$ | _____ |
| 34. | $6 \div 6 =$ | _____ | 54. | $48 \div 6 =$ | _____ |
| 35. | $30 \div 6 =$ | _____ | 55. | $66 \div 6 =$ | _____ |
| 36. | $48 \div 6 =$ | _____ | 56. | $60 \div 6 =$ | _____ |
| 37. | $72 \div 6 =$ | _____ | 57. | $72 \div 6 =$ | _____ |
| 38. | $18 \div 6 =$ | _____ | 58. | $42 \div 6 =$ | _____ |
| 39. | $6 \div 6 =$ | _____ | 59. | $30 \div 6 =$ | _____ |
| 40. | $36 \div 6 =$ | _____ | 60. | $36 \div 6 =$ | _____ |

Continue here...

- | | | |
|-----|---------------|-------|
| 13. | $72 \div 6 =$ | _____ |
| 14. | $48 \div 6 =$ | _____ |
| 15. | $60 \div 6 =$ | _____ |
| 16. | $36 \div 6 =$ | _____ |
| 17. | $66 \div 6 =$ | _____ |
| 18. | $6 \div 6 =$ | _____ |
| 19. | $18 \div 6 =$ | _____ |
| 20. | $42 \div 6 =$ | _____ |



SCORE: _____



Grown-ups:
Can learners spot links between neighbouring questions?



Name: _____

Date: _____

DIVISION 2

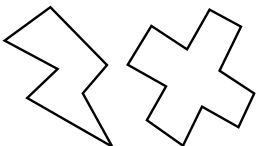
Practise 6s

Complete first and then use it to help you if you get stuck.

ROCK BOX	
1. $6 \div 6 =$	2. $6 \div 1 =$
3. $12 \div 6 =$	4. $12 \div 2 =$
5. $18 \div 6 =$	6. $18 \div 3 =$
7. $24 \div 6 =$	8. $24 \div 4 =$
9. $30 \div 6 =$	10. $30 \div 5 =$
11. $36 \div 6 =$	12. $36 \div 6 =$
13. $42 \div 6 =$	14. $42 \div 7 =$
15. $48 \div 6 =$	16. $48 \div 8 =$
17. $54 \div 6 =$	18. $54 \div 9 =$
19. $60 \div 6 =$	20. $60 \div 10 =$
21. $66 \div 6 =$	22. $66 \div 11 =$
23. $72 \div 6 =$	24. $72 \div 12 =$

Continue here...

- | | | |
|-------------------------|--------------------------|--------------------------|
| 25. $30 \div 5 =$ _____ | 33. $36 \div 6 =$ _____ | 41. $48 \div 8 =$ _____ |
| 26. $18 \div 6 =$ _____ | 34. $30 \div 6 =$ _____ | 42. $36 \div 6 =$ _____ |
| 27. $30 \div 6 =$ _____ | 35. $36 \div 6 =$ _____ | 43. $30 \div 6 =$ _____ |
| 28. $60 \div 6 =$ _____ | 36. $54 \div 9 =$ _____ | 44. $72 \div 12 =$ _____ |
| 29. $18 \div 3 =$ _____ | 37. $66 \div 11 =$ _____ | 45. $60 \div 6 =$ _____ |
| 30. $6 \div 6 =$ _____ | 38. $54 \div 6 =$ _____ | 46. $18 \div 6 =$ _____ |
| 31. $6 \div 1 =$ _____ | 39. $24 \div 6 =$ _____ | 47. $42 \div 6 =$ _____ |
| 32. $12 \div 6 =$ _____ | 40. $42 \div 7 =$ _____ | 48. $6 \div 1 =$ _____ |
| | | 49. $66 \div 6 =$ _____ |
| | | 50. $24 \div 4 =$ _____ |
| | | 51. $24 \div 6 =$ _____ |
| | | 52. $48 \div 6 =$ _____ |
| | | 53. $54 \div 9 =$ _____ |
| | | 54. $48 \div 8 =$ _____ |
| | | 55. $60 \div 6 =$ _____ |
| | | 56. $36 \div 6 =$ _____ |
| | | 57. $12 \div 2 =$ _____ |
| | | 58. $18 \div 3 =$ _____ |
| | | 59. $42 \div 6 =$ _____ |
| | | 60. $30 \div 5 =$ _____ |



SCORE:

Grown-ups:
Can learners spot links between neighbouring questions?





CHECK 1



Name: _____

Date: _____

- | | | | | | |
|-----|-----------------------|-----|-----------------------|-----|---------------------|
| 1. | $8 \times 6 =$ _____ | 21. | $8 \times 6 =$ _____ | 41. | $12 \div 6 =$ _____ |
| 2. | $2 \times 6 =$ _____ | 22. | $10 \times 6 =$ _____ | 42. | $60 \div 6 =$ _____ |
| 3. | $9 \times 6 =$ _____ | 23. | $12 \times 6 =$ _____ | 43. | $48 \div 6 =$ _____ |
| 4. | $4 \times 6 =$ _____ | 24. | $9 \times 6 =$ _____ | 44. | $6 \div 6 =$ _____ |
| 5. | $3 \times 6 =$ _____ | 25. | $2 \times 6 =$ _____ | 45. | $30 \div 6 =$ _____ |
| 6. | $6 \times 6 =$ _____ | 26. | $1 \times 6 =$ _____ | 46. | $54 \div 6 =$ _____ |
| 7. | $7 \times 6 =$ _____ | 27. | $5 \times 6 =$ _____ | 47. | $42 \div 6 =$ _____ |
| 8. | $10 \times 6 =$ _____ | 28. | $4 \times 6 =$ _____ | 48. | $6 \div 6 =$ _____ |
| 9. | $12 \times 6 =$ _____ | 29. | $3 \times 6 =$ _____ | 49. | $48 \div 6 =$ _____ |
| 10. | $1 \times 6 =$ _____ | 30. | $6 \times 6 =$ _____ | 50. | $72 \div 6 =$ _____ |
| 11. | $9 \times 6 =$ _____ | 31. | $18 \div 6 =$ _____ | 51. | $24 \div 6 =$ _____ |
| 12. | $2 \times 6 =$ _____ | 32. | $36 \div 6 =$ _____ | 52. | $36 \div 6 =$ _____ |
| 13. | $11 \times 6 =$ _____ | 33. | $54 \div 6 =$ _____ | 53. | $30 \div 6 =$ _____ |
| 14. | $7 \times 6 =$ _____ | 34. | $30 \div 6 =$ _____ | 54. | $18 \div 6 =$ _____ |
| 15. | $9 \times 6 =$ _____ | 35. | $60 \div 6 =$ _____ | 55. | $60 \div 6 =$ _____ |
| 16. | $4 \times 6 =$ _____ | 36. | $6 \div 6 =$ _____ | 56. | $66 \div 6 =$ _____ |
| 17. | $3 \times 6 =$ _____ | 37. | $42 \div 6 =$ _____ | 57. | $54 \div 6 =$ _____ |
| 18. | $6 \times 6 =$ _____ | 38. | $72 \div 6 =$ _____ | 58. | $6 \div 6 =$ _____ |
| 19. | $1 \times 6 =$ _____ | 39. | $48 \div 6 =$ _____ | 59. | $12 \div 6 =$ _____ |
| 20. | $5 \times 6 =$ _____ | 40. | $24 \div 6 =$ _____ | 60. | $54 \div 6 =$ _____ |

SCORE:
(5 minute limit)

/60

TIME TAKEN (optional)

--	--

MINUTES SECONDS



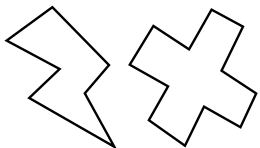
Name: _____

Date: _____

MULTIPLICATION 3

Practise 6s

- | | | | | | |
|-----|-----------------------|-----|-----------------------|-----|-----------------------|
| 1. | $6 \times 5 =$ _____ | 21. | $6 \times 8 =$ _____ | 41. | $1 \times 6 =$ _____ |
| 2. | $6 \times 3 =$ _____ | 22. | $6 \times 1 =$ _____ | 42. | $6 \times 12 =$ _____ |
| 3. | $3 \times 6 =$ _____ | 23. | $6 \times 2 =$ _____ | 43. | $11 \times 6 =$ _____ |
| 4. | $6 \times 7 =$ _____ | 24. | $4 \times 6 =$ _____ | 44. | $6 \times 7 =$ _____ |
| 5. | $6 \times 4 =$ _____ | 25. | $6 \times 6 =$ _____ | 45. | $6 \times 1 =$ _____ |
| 6. | $7 \times 6 =$ _____ | 26. | $9 \times 6 =$ _____ | 46. | $6 \times 3 =$ _____ |
| 7. | $5 \times 6 =$ _____ | 27. | $6 \times 12 =$ _____ | 47. | $12 \times 6 =$ _____ |
| 8. | $6 \times 8 =$ _____ | 28. | $11 \times 6 =$ _____ | 48. | $9 \times 6 =$ _____ |
| 9. | $9 \times 6 =$ _____ | 29. | $6 \times 1 =$ _____ | 49. | $6 \times 6 =$ _____ |
| 10. | $6 \times 11 =$ _____ | 30. | $7 \times 6 =$ _____ | 50. | $3 \times 6 =$ _____ |
| 11. | $12 \times 6 =$ _____ | 31. | $6 \times 11 =$ _____ | 51. | $5 \times 6 =$ _____ |
| 12. | $6 \times 12 =$ _____ | 32. | $6 \times 5 =$ _____ | 52. | $10 \times 6 =$ _____ |
| 13. | $9 \times 6 =$ _____ | 33. | $6 \times 3 =$ _____ | 53. | $6 \times 5 =$ _____ |
| 14. | $6 \times 10 =$ _____ | 34. | $6 \times 7 =$ _____ | 54. | $8 \times 6 =$ _____ |
| 15. | $6 \times 7 =$ _____ | 35. | $7 \times 6 =$ _____ | 55. | $6 \times 2 =$ _____ |
| 16. | $6 \times 6 =$ _____ | 36. | $6 \times 4 =$ _____ | 56. | $6 \times 4 =$ _____ |
| 17. | $3 \times 6 =$ _____ | 37. | $6 \times 3 =$ _____ | 57. | $7 \times 6 =$ _____ |
| 18. | $1 \times 6 =$ _____ | 38. | $2 \times 6 =$ _____ | 58. | $9 \times 6 =$ _____ |
| 19. | $4 \times 6 =$ _____ | 39. | $9 \times 6 =$ _____ | 59. | $6 \times 8 =$ _____ |
| 20. | $8 \times 6 =$ _____ | 40. | $6 \times 8 =$ _____ | 60. | $6 \times 6 =$ _____ |



SCORE:

Grown-ups:
Can learners spot links between neighbouring questions?



Name: _____

MISSING NUMBERS 3

Practise 6s

Date: _____

1. _____ $\times 6 = 66$

21. _____ $\times 6 = 24$

41. _____ $\times 6 = 6$

2. _____ $\times 6 = 72$

22. _____ $\times 12 = 72$

42. _____ $\times 11 = 66$

3. _____ $\times 7 = 42$

23. _____ $\times 6 = 48$

43. _____ $\times 6 = 48$

4. _____ $\times 6 = 30$

24. _____ $\times 7 = 42$

44. _____ $\times 9 = 54$

5. _____ $\times 9 = 54$

25. _____ $\times 5 = 30$

45. _____ $\times 6 = 54$

6. _____ $\times 6 = 36$

26. _____ $\times 6 = 36$

46. _____ $\times 6 = 60$

7. _____ $\times 6 = 36$

27. _____ $\times 6 = 12$

47. _____ $\times 6 = 24$

8. _____ $\times 4 = 24$

28. _____ $\times 1 = 6$

48. _____ $\times 2 = 12$

9. _____ $\times 9 = 54$

29. _____ $\times 6 = 60$

49. _____ $\times 1 = 6$

10. _____ $\times 3 = 18$

30. _____ $\times 6 = 66$

50. _____ $\times 6 = 48$

11. _____ $\times 6 = 12$

31. _____ $\times 9 = 54$

51. _____ $\times 6 = 36$

12. _____ $\times 1 = 6$

32. _____ $\times 4 = 24$

52. _____ $\times 4 = 24$

13. _____ $\times 6 = 6$

33. _____ $\times 6 = 18$

53. _____ $\times 6 = 30$

14. _____ $\times 6 = 60$

34. _____ $\times 6 = 60$

54. _____ $\times 6 = 42$

15. _____ $\times 6 = 66$

35. _____ $\times 6 = 18$

55. _____ $\times 9 = 54$

16. _____ $\times 7 = 42$

36. _____ $\times 5 = 30$

56. _____ $\times 6 = 66$

17. _____ $\times 5 = 30$

37. _____ $\times 6 = 54$

57. _____ $\times 12 = 72$

18. _____ $\times 8 = 48$

38. _____ $\times 4 = 24$

58. _____ $\times 6 = 72$

19. _____ $\times 6 = 24$

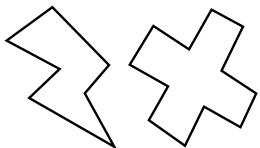
39. _____ $\times 6 = 6$

59. _____ $\times 6 = 18$

20. _____ $\times 6 = 42$

40. _____ $\times 6 = 36$

60. _____ $\times 9 = 54$



SCORE:

Grown-ups:
Can learners spot links between neighbouring questions?



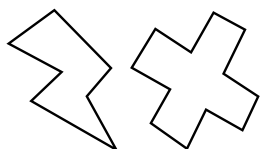
Name: _____

Date: _____

DIVISION 3

Practise 6s

- | | | | | | |
|-----|----------------------|-----|----------------------|-----|----------------------|
| 1. | $42 \div 7 =$ _____ | 21. | $72 \div 6 =$ _____ | 41. | $48 \div 6 =$ _____ |
| 2. | $42 \div 6 =$ _____ | 22. | $36 \div 6 =$ _____ | 42. | $54 \div 6 =$ _____ |
| 3. | $18 \div 3 =$ _____ | 23. | $54 \div 6 =$ _____ | 43. | $42 \div 7 =$ _____ |
| 4. | $36 \div 6 =$ _____ | 24. | $42 \div 7 =$ _____ | 44. | $66 \div 11 =$ _____ |
| 5. | $12 \div 6 =$ _____ | 25. | $18 \div 6 =$ _____ | 45. | $66 \div 6 =$ _____ |
| 6. | $24 \div 4 =$ _____ | 26. | $60 \div 6 =$ _____ | 46. | $6 \div 1 =$ _____ |
| 7. | $60 \div 6 =$ _____ | 27. | $30 \div 5 =$ _____ | 47. | $60 \div 6 =$ _____ |
| 8. | $66 \div 11 =$ _____ | 28. | $42 \div 6 =$ _____ | 48. | $54 \div 9 =$ _____ |
| 9. | $66 \div 6 =$ _____ | 29. | $24 \div 4 =$ _____ | 49. | $48 \div 8 =$ _____ |
| 10. | $42 \div 6 =$ _____ | 30. | $36 \div 6 =$ _____ | 50. | $24 \div 6 =$ _____ |
| 11. | $30 \div 5 =$ _____ | 31. | $24 \div 6 =$ _____ | 51. | $24 \div 4 =$ _____ |
| 12. | $72 \div 12 =$ _____ | 32. | $18 \div 3 =$ _____ | 52. | $36 \div 6 =$ _____ |
| 13. | $72 \div 6 =$ _____ | 33. | $54 \div 9 =$ _____ | 53. | $18 \div 6 =$ _____ |
| 14. | $48 \div 6 =$ _____ | 34. | $60 \div 6 =$ _____ | 54. | $42 \div 6 =$ _____ |
| 15. | $66 \div 6 =$ _____ | 35. | $66 \div 6 =$ _____ | 55. | $18 \div 3 =$ _____ |
| 16. | $30 \div 6 =$ _____ | 36. | $60 \div 6 =$ _____ | 56. | $72 \div 6 =$ _____ |
| 17. | $36 \div 6 =$ _____ | 37. | $72 \div 12 =$ _____ | 57. | $36 \div 6 =$ _____ |
| 18. | $18 \div 6 =$ _____ | 38. | $6 \div 1 =$ _____ | 58. | $30 \div 6 =$ _____ |
| 19. | $18 \div 3 =$ _____ | 39. | $6 \div 6 =$ _____ | 59. | $12 \div 2 =$ _____ |
| 20. | $54 \div 9 =$ _____ | 40. | $48 \div 8 =$ _____ | 60. | $12 \div 6 =$ _____ |



SCORE:

Grown-ups:
Can learners spot links
between neighbouring
questions?



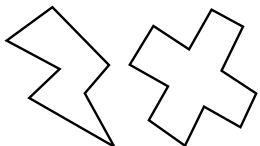
Name: _____

Date: _____

MULTIPLICATION 4

Practise 6s

- | | | | | | |
|-----|-----------------------|-----|-----------------------|-----|-----------------------|
| 1. | $12 \times 6 =$ _____ | 21. | $1 \times 6 =$ _____ | 41. | $6 \times 3 =$ _____ |
| 2. | $11 \times 6 =$ _____ | 22. | $6 \times 4 =$ _____ | 42. | $6 \times 2 =$ _____ |
| 3. | $6 \times 8 =$ _____ | 23. | $4 \times 6 =$ _____ | 43. | $8 \times 6 =$ _____ |
| 4. | $9 \times 6 =$ _____ | 24. | $6 \times 3 =$ _____ | 44. | $6 \times 4 =$ _____ |
| 5. | $6 \times 7 =$ _____ | 25. | $6 \times 6 =$ _____ | 45. | $6 \times 9 =$ _____ |
| 6. | $6 \times 5 =$ _____ | 26. | $9 \times 6 =$ _____ | 46. | $1 \times 6 =$ _____ |
| 7. | $6 \times 6 =$ _____ | 27. | $6 \times 8 =$ _____ | 47. | $11 \times 6 =$ _____ |
| 8. | $6 \times 4 =$ _____ | 28. | $6 \times 10 =$ _____ | 48. | $12 \times 6 =$ _____ |
| 9. | $3 \times 6 =$ _____ | 29. | $11 \times 6 =$ _____ | 49. | $6 \times 7 =$ _____ |
| 10. | $6 \times 3 =$ _____ | 30. | $6 \times 6 =$ _____ | 50. | $10 \times 6 =$ _____ |
| 11. | $6 \times 6 =$ _____ | 31. | $6 \times 6 =$ _____ | 51. | $4 \times 6 =$ _____ |
| 12. | $7 \times 6 =$ _____ | 32. | $9 \times 6 =$ _____ | 52. | $6 \times 9 =$ _____ |
| 13. | $10 \times 6 =$ _____ | 33. | $3 \times 6 =$ _____ | 53. | $6 \times 6 =$ _____ |
| 14. | $6 \times 12 =$ _____ | 34. | $5 \times 6 =$ _____ | 54. | $6 \times 8 =$ _____ |
| 15. | $11 \times 6 =$ _____ | 35. | $6 \times 8 =$ _____ | 55. | $4 \times 6 =$ _____ |
| 16. | $6 \times 6 =$ _____ | 36. | $6 \times 11 =$ _____ | 56. | $11 \times 6 =$ _____ |
| 17. | $6 \times 8 =$ _____ | 37. | $6 \times 7 =$ _____ | 57. | $6 \times 3 =$ _____ |
| 18. | $6 \times 3 =$ _____ | 38. | $1 \times 6 =$ _____ | 58. | $6 \times 10 =$ _____ |
| 19. | $2 \times 6 =$ _____ | 39. | $2 \times 6 =$ _____ | 59. | $6 \times 6 =$ _____ |
| 20. | $6 \times 1 =$ _____ | 40. | $6 \times 5 =$ _____ | 60. | $9 \times 6 =$ _____ |



SCORE:



Grown-ups:
Can learners spot links between neighbouring questions?



Name: _____

MISSING NUMBERS 4

Practise 6s

Date: _____

1. _____ \times 6 = 36

21. _____ \times 6 = 30

41. _____ \times 6 = 36

2. _____ \times 9 = 54

22. _____ \times 6 = 24

42. _____ \times 5 = 30

3. _____ \times 8 = 48

23. _____ \times 3 = 18

43. _____ \times 6 = 60

4. _____ \times 4 = 24

24. _____ \times 6 = 36

44. _____ \times 6 = 6

5. _____ \times 6 = 18

25. _____ \times 6 = 42

45. _____ \times 9 = 54

6. _____ \times 6 = 30

26. _____ \times 6 = 30

46. _____ \times 6 = 66

7. _____ \times 6 = 36

27. _____ \times 6 = 54

47. _____ \times 7 = 42

8. _____ \times 6 = 6

28. _____ \times 8 = 48

48. _____ \times 3 = 18

9. _____ \times 6 = 12

29. _____ \times 6 = 6

49. _____ \times 2 = 12

10. _____ \times 6 = 60

30. _____ \times 12 = 72

50. _____ \times 6 = 24

11. _____ \times 12 = 72

31. _____ \times 6 = 18

51. _____ \times 5 = 30

12. _____ \times 6 = 36

32. _____ \times 2 = 12

52. _____ \times 6 = 36

13. _____ \times 6 = 42

33. _____ \times 6 = 36

53. _____ \times 6 = 60

14. _____ \times 1 = 6

34. _____ \times 6 = 12

54. _____ \times 12 = 72

15. _____ \times 6 = 12

35. _____ \times 6 = 6

55. _____ \times 1 = 6

16. _____ \times 6 = 66

36. _____ \times 12 = 72

56. _____ \times 6 = 60

17. _____ \times 9 = 54

37. _____ \times 9 = 54

57. _____ \times 9 = 54

18. _____ \times 6 = 60

38. _____ \times 6 = 24

58. _____ \times 6 = 24

19. _____ \times 6 = 36

39. _____ \times 6 = 18

59. _____ \times 6 = 42

20. _____ \times 6 = 42

40. _____ \times 8 = 48

60. _____ \times 7 = 42



SCORE:

Grown-ups:
Can learners spot links between neighbouring questions?



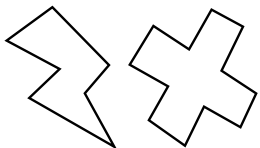
Name: _____

Date: _____

DIVISION 4

Practise 6s

- | | | | | | |
|-----|----------------------|-----|----------------------|-----|----------------------|
| 1. | $72 \div 6 =$ _____ | 21. | $60 \div 6 =$ _____ | 41. | $72 \div 6 =$ _____ |
| 2. | $54 \div 6 =$ _____ | 22. | $72 \div 6 =$ _____ | 42. | $6 \div 1 =$ _____ |
| 3. | $6 \div 1 =$ _____ | 23. | $66 \div 11 =$ _____ | 43. | $6 \div 6 =$ _____ |
| 4. | $6 \div 6 =$ _____ | 24. | $42 \div 6 =$ _____ | 44. | $24 \div 6 =$ _____ |
| 5. | $54 \div 9 =$ _____ | 25. | $42 \div 7 =$ _____ | 45. | $42 \div 7 =$ _____ |
| 6. | $48 \div 6 =$ _____ | 26. | $24 \div 6 =$ _____ | 46. | $42 \div 6 =$ _____ |
| 7. | $30 \div 6 =$ _____ | 27. | $30 \div 6 =$ _____ | 47. | $54 \div 9 =$ _____ |
| 8. | $36 \div 6 =$ _____ | 28. | $54 \div 6 =$ _____ | 48. | $60 \div 6 =$ _____ |
| 9. | $42 \div 7 =$ _____ | 29. | $54 \div 9 =$ _____ | 49. | $66 \div 6 =$ _____ |
| 10. | $60 \div 6 =$ _____ | 30. | $48 \div 6 =$ _____ | 50. | $12 \div 6 =$ _____ |
| 11. | $18 \div 3 =$ _____ | 31. | $36 \div 6 =$ _____ | 51. | $66 \div 11 =$ _____ |
| 12. | $12 \div 2 =$ _____ | 32. | $24 \div 4 =$ _____ | 52. | $36 \div 6 =$ _____ |
| 13. | $30 \div 6 =$ _____ | 33. | $6 \div 6 =$ _____ | 53. | $72 \div 12 =$ _____ |
| 14. | $36 \div 6 =$ _____ | 34. | $30 \div 5 =$ _____ | 54. | $24 \div 6 =$ _____ |
| 15. | $54 \div 6 =$ _____ | 35. | $42 \div 7 =$ _____ | 55. | $42 \div 6 =$ _____ |
| 16. | $24 \div 6 =$ _____ | 36. | $12 \div 6 =$ _____ | 56. | $36 \div 6 =$ _____ |
| 17. | $24 \div 4 =$ _____ | 37. | $54 \div 9 =$ _____ | 57. | $6 \div 6 =$ _____ |
| 18. | $48 \div 8 =$ _____ | 38. | $18 \div 6 =$ _____ | 58. | $12 \div 2 =$ _____ |
| 19. | $6 \div 6 =$ _____ | 39. | $66 \div 11 =$ _____ | 59. | $60 \div 6 =$ _____ |
| 20. | $72 \div 12 =$ _____ | 40. | $36 \div 6 =$ _____ | 60. | $6 \div 1 =$ _____ |



SCORE:

Grown-ups:
Can learners spot links between neighbouring questions?





CHECK 2



Name: _____

Date: _____

- | | | | | | |
|-----|-----------------------|-----|-----------------------|-----|---------------------|
| 1. | $9 \times 6 =$ _____ | 21. | $3 \times 6 =$ _____ | 41. | $6 \div 6 =$ _____ |
| 2. | $4 \times 6 =$ _____ | 22. | $10 \times 6 =$ _____ | 42. | $54 \div 6 =$ _____ |
| 3. | $12 \times 6 =$ _____ | 23. | $2 \times 6 =$ _____ | 43. | $42 \div 6 =$ _____ |
| 4. | $3 \times 6 =$ _____ | 24. | $4 \times 6 =$ _____ | 44. | $66 \div 6 =$ _____ |
| 5. | $6 \times 6 =$ _____ | 25. | $8 \times 6 =$ _____ | 45. | $12 \div 6 =$ _____ |
| 6. | $10 \times 6 =$ _____ | 26. | $6 \times 6 =$ _____ | 46. | $60 \div 6 =$ _____ |
| 7. | $7 \times 6 =$ _____ | 27. | $12 \times 6 =$ _____ | 47. | $72 \div 6 =$ _____ |
| 8. | $2 \times 6 =$ _____ | 28. | $5 \times 6 =$ _____ | 48. | $6 \div 6 =$ _____ |
| 9. | $1 \times 6 =$ _____ | 29. | $1 \times 6 =$ _____ | 49. | $18 \div 6 =$ _____ |
| 10. | $8 \times 6 =$ _____ | 30. | $7 \times 6 =$ _____ | 50. | $48 \div 6 =$ _____ |
| 11. | $4 \times 6 =$ _____ | 31. | $54 \div 6 =$ _____ | 51. | $24 \div 6 =$ _____ |
| 12. | $5 \times 6 =$ _____ | 32. | $30 \div 6 =$ _____ | 52. | $42 \div 6 =$ _____ |
| 13. | $7 \times 6 =$ _____ | 33. | $24 \div 6 =$ _____ | 53. | $18 \div 6 =$ _____ |
| 14. | $6 \times 6 =$ _____ | 34. | $54 \div 6 =$ _____ | 54. | $66 \div 6 =$ _____ |
| 15. | $9 \times 6 =$ _____ | 35. | $66 \div 6 =$ _____ | 55. | $60 \div 6 =$ _____ |
| 16. | $12 \times 6 =$ _____ | 36. | $18 \div 6 =$ _____ | 56. | $30 \div 6 =$ _____ |
| 17. | $1 \times 6 =$ _____ | 37. | $36 \div 6 =$ _____ | 57. | $12 \div 6 =$ _____ |
| 18. | $11 \times 6 =$ _____ | 38. | $42 \div 6 =$ _____ | 58. | $42 \div 6 =$ _____ |
| 19. | $9 \times 6 =$ _____ | 39. | $30 \div 6 =$ _____ | 59. | $36 \div 6 =$ _____ |
| 20. | $7 \times 6 =$ _____ | 40. | $48 \div 6 =$ _____ | 60. | $6 \div 6 =$ _____ |

SCORE:
(5 minute limit)

/60

TIME TAKEN (optional)

--	--

MINUTES SECONDS

